

Write your name here

Surname

Other names

Pearson
Edexcel GCE

Centre Number

--	--	--	--	--

Candidate Number

--	--	--	--	--

Chemistry

Advanced Subsidiary

Unit 1: The Core Principles of Chemistry

Friday 22 May 2015 – Morning

Time: 1 hour 30 minutes

Paper Reference

6CH01/01

Candidates may use a calculator.

Total Marks

Instructions

- Use **black** ink or ball-point pen.
- **Fill in the boxes** at the top of this page with your name, centre number and candidate number.
- Answer **all** questions.
- Answer the questions in the spaces provided
– *there may be more space than you need.*

Information

- The total mark for this paper is 80.
- The marks for **each** question are shown in brackets
– *use this as a guide as to how much time to spend on each question.*
- Questions labelled with an **asterisk** (*) are ones where the quality of your written communication will be assessed
– *you should take particular care with your spelling, punctuation and grammar, as well as the clarity of expression, on these questions.*
- A Periodic Table is printed on the back cover of this paper.

Advice

- Read each question carefully before you start to answer it.
- Keep an eye on the time.
- Try to answer every question.
- Check your answers if you have time at the end.

Turn over ►

P44879A

©2015 Pearson Education Ltd.

6/6/6/

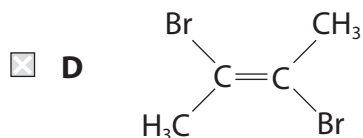
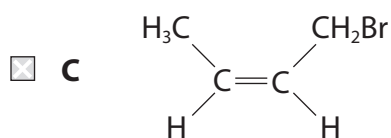
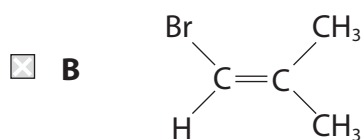
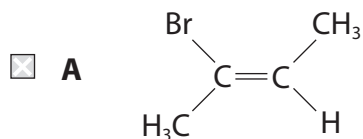


PEARSON

SECTION A

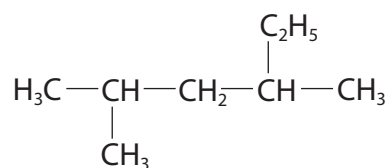
Answer **ALL** the questions in this section. You should aim to spend no more than 20 minutes on this section. For each question, select one answer from A to D and put a cross in the box . If you change your mind, put a line through the box and then mark your new answer with a cross .

1 Which molecule does **not** exhibit *E/Z* isomerism?



(Total for Question 1 = 1 mark)

2 What is the systematic name for the compound with the following formula?



- A** 2-methyl-4-ethylpentane
- B** 2-ethyl-4-methylpentane
- C** 2,4-dimethylhexane
- D** 3,5-dimethylhexane

(Total for Question 2 = 1 mark)

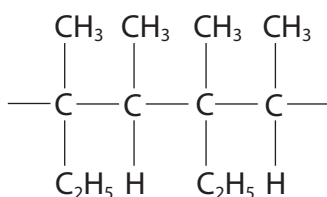


3 Which of the following molecules is formed on adding bromine **water** to ethene?

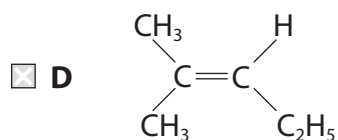
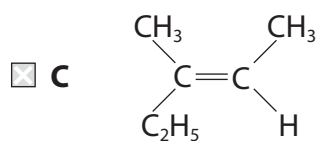
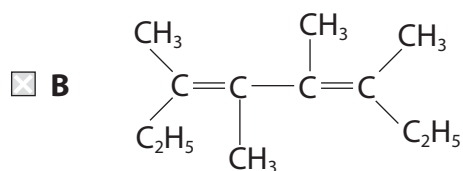
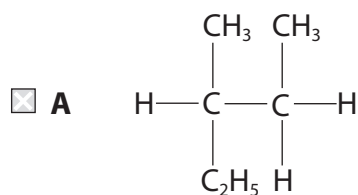
- A ethanol
- B ethane-1,2-diol
- C bromoethane
- D 2-bromoethanol

(Total for Question 3 = 1 mark)

4 A section of a polymer is shown below.



What is the monomer for this polymer?



(Total for Question 4 = 1 mark)



5 Which of the following equations has the correct state symbols for the reaction of dilute hydrochloric acid with magnesium oxide?

- A $\text{MgO(s)} + 2\text{HCl(aq)} \rightarrow \text{MgCl}_2\text{(s)} + \text{H}_2\text{O(l)}$
- B $\text{MgO(s)} + 2\text{HCl(aq)} \rightarrow \text{MgCl}_2\text{(aq)} + \text{H}_2\text{O(l)}$
- C $\text{MgO(s)} + 2\text{HCl(l)} \rightarrow \text{MgCl}_2\text{(s)} + \text{H}_2\text{O(l)}$
- D $\text{MgO(s)} + 2\text{HCl(l)} \rightarrow \text{MgCl}_2\text{(aq)} + \text{H}_2\text{O(l)}$

(Total for Question 5 = 1 mark)

6 This question is about the reaction between sodium carbonate solution and dilute nitric acid.



(a) What is the **ionic** equation for this reaction?

(1)

- A $\text{Na}_2\text{CO}_3\text{(aq)} + 2\text{H}^+\text{(aq)} \rightarrow 2\text{Na}^+\text{(aq)} + \text{CO}_2\text{(g)} + \text{H}_2\text{O(l)}$
- B $\text{Na}^+\text{(aq)} + \text{NO}_3^-\text{(aq)} \rightarrow \text{NaNO}_3\text{(aq)}$
- C $\text{CO}_3^{2-}\text{(aq)} + 2\text{H}^+\text{(aq)} \rightarrow \text{CO}_2\text{(g)} + \text{H}_2\text{O(l)}$
- D $\text{CO}_3^{2-}\text{(aq)} + 2\text{HNO}_3\text{(aq)} \rightarrow 2\text{NO}_3^-\text{(aq)} + \text{CO}_2\text{(g)} + \text{H}_2\text{O(l)}$

(b) What is the volume of carbon dioxide produced from the complete reaction of 0.10 mol of nitric acid at room temperature and pressure?

[1 mol of any gas occupies 24 dm³ at room temperature and pressure.]

(1)

- A 1.2 dm³
- B 1.8 dm³
- C 2.4 dm³
- D 3.6 dm³

(c) What volume of sodium carbonate solution of concentration 0.500 mol dm⁻³, would be needed to completely react with 25.0 cm³ of nitric acid of concentration 0.250 mol dm⁻³?

(1)

- A 6.25 cm³
- B 12.50 cm³
- C 18.75 cm³
- D 25.00 cm³

(Total for Question 6 = 3 marks)



7 Lithium reacts with water to produce hydrogen.



(a) In an experiment, 0.069 g (0.01 mol) of lithium produced 90 cm³ of hydrogen at room temperature and pressure. What is the percentage yield of hydrogen?

[1 mol of any gas occupies 24 dm³ at room temperature and pressure.]

(1)

- A 45%
- B 60%
- C 75%
- D 90%

(b) Which of the following is **not** a possible reason for the yield being less than 100%?

(1)

- A Some oil remained on the surface of the lithium.
- B Hydrogen gas is very soluble in water.
- C A layer of oxide was present on the surface of the lithium.
- D Some of the hydrogen gas escaped collection.

(Total for Question 7 = 2 marks)

8 How many moles of **atoms** are present in 240 cm³ of carbon dioxide at room temperature and pressure?

[1 mol of any gas occupies 24 dm³ at room temperature and pressure.]

- A 0.010
- B 0.020
- C 0.024
- D 0.030

(Total for Question 8 = 1 mark)



9 What is the percentage by mass of nitrogen in ammonium nitrate, NH_4NO_3 ?

[Molar masses/ g mol^{-1} : N = 14.0; H = 1.0; O = 16.0]

- A 14.0%
- B 17.5%
- C 28.0%
- D 35.0%

(Total for Question 9 = 1 mark)

10 The first five successive ionization energies for an element J, in kJ mol^{-1} , are

1st	2nd	3rd	4th	5th
738	1450	7733	10543	13630

The formula of the compound of chlorine with element J is

- A JCl
- B JCl_2
- C JCl_3
- D J_2Cl_3

(Total for Question 10 = 1 mark)

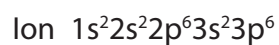
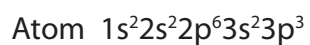
11 Which of the following is the correct order of increasing melting temperature of elements of Period 3?

- A Na, Mg, Al, Si
- B Na, Mg, Si, Al
- C Si, Na, Mg, Al
- D Si, Al, Mg, Na

(Total for Question 11 = 1 mark)



12 Which one of the following elements undergoes the change in electronic configuration shown when it forms the stated ion?



- A B to B^{3+}
- B Al to Al^{3+}
- C N to N^{3-}
- D P to P^{3-}

(Total for Question 12 = 1 mark)

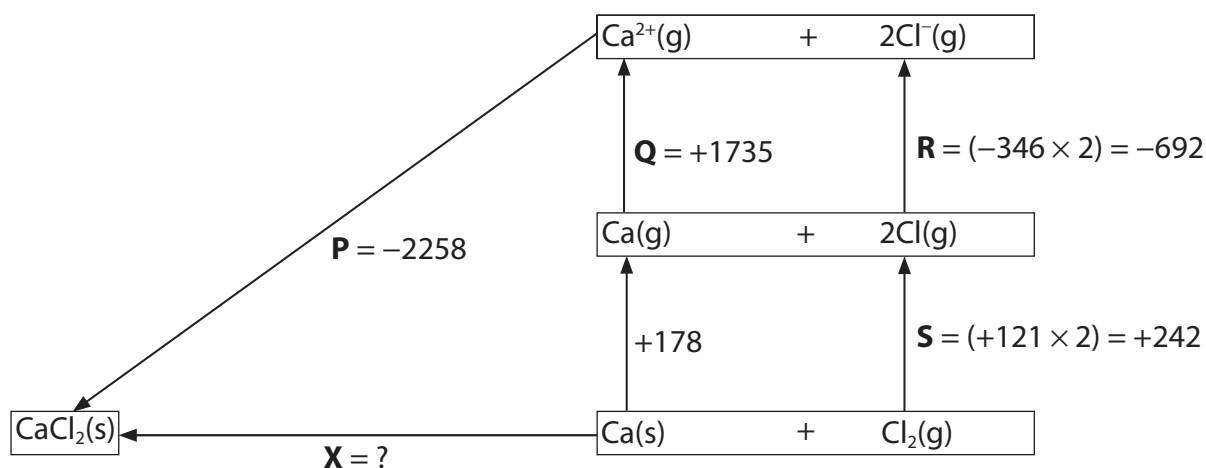
13 Which of the following compounds has the most polarized **anion**?

- A Na_2O
- B MgO
- C K_2O
- D CaO

(Total for Question 13 = 1 mark)



- 14 The diagram shows a Born-Haber cycle for calcium chloride. It is not drawn to scale. All units are in kJ mol^{-1} .



- (a) Which enthalpy change is correctly labelled on the diagram?

(1)

- A Enthalpy change for the formation of calcium chloride (**P**).
- B First ionization energy of calcium (**Q**).
- C Electron affinity of chlorine (**R**).
- D Twice the enthalpy change of atomization of chlorine (**S**).

- (b) What is the value of **X**, in kJ mol^{-1} ?

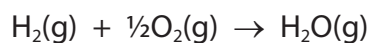
(1)

- A $+795$
- B -795
- C $+3721$
- D -3721

(Total for Question 14 = 2 marks)



15 Calculate the enthalpy change, in kJ mol^{-1} , for the reaction



DATA:

Bond	Bond enthalpy / kJ mol^{-1}
H—H	+436
O=O	+498
H—O	+464

- A -243
- B -6
- C +6
- D +221

(Total for Question 15 = 1 mark)

16 The chemical properties of an element are determined by its

- A electronic structure.
- B number of neutrons.
- C relative atomic mass.
- D number of protons plus neutrons.

(Total for Question 16 = 1 mark)

TOTAL FOR SECTION A = 20 MARKS



BLANK PAGE



SECTION B

Answer ALL the questions. Write your answers in the spaces provided.

17 This question is about the use of mass spectrometers.

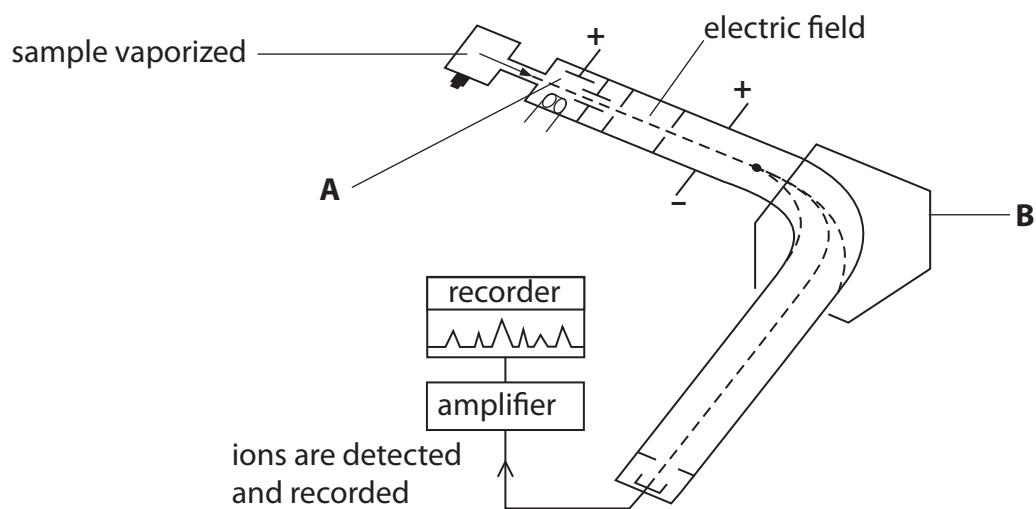
- (a) Bromine has two isotopes, ^{79}Br and ^{81}Br . Explain the term **isotopes**, by reference to sub-atomic particles.

(1)

.....

.....

- (b) The presence and abundance of these isotopes can be determined by using a mass spectrometer such as that shown in the diagram below.



- (i) Explain how ions are produced in the area labelled **A**.

(2)

.....

.....

.....

- (ii) State what is used to deflect the ions moving through the mass spectrometer in the area labelled **B**.

(1)

.....

- (iii) Explain why there is a vacuum in a mass spectrometer.

(1)

.....

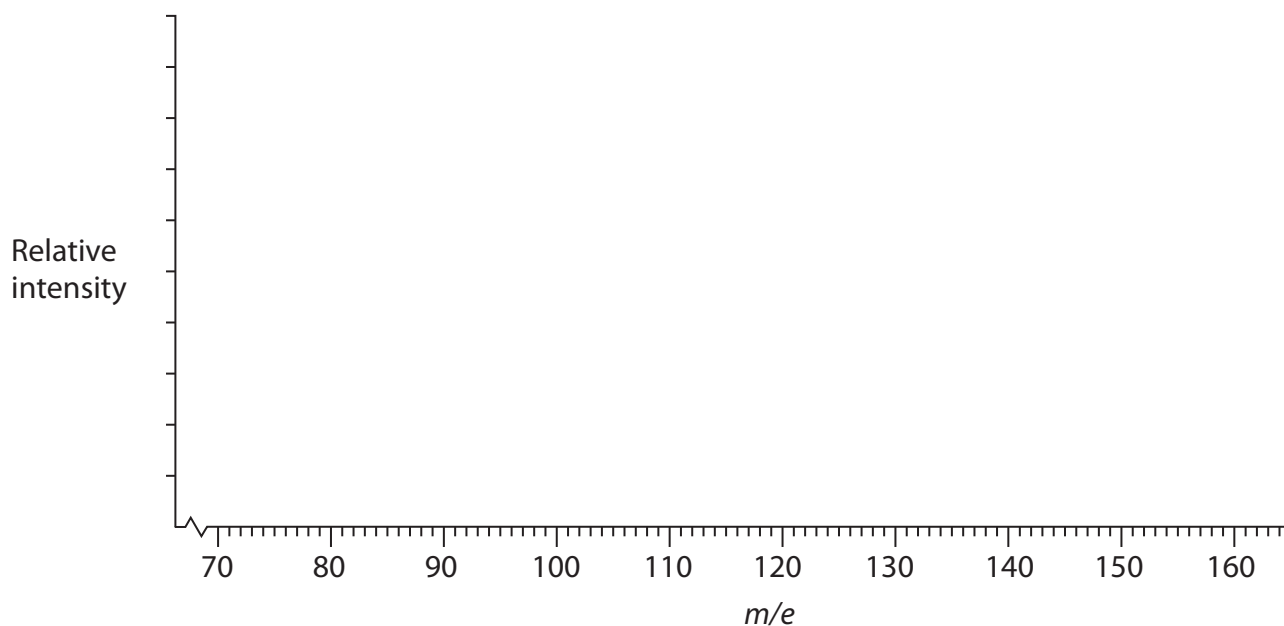
.....

.....



(c) Complete the mass spectrum below for a sample of bromine **gas** that contains approximately half ^{79}Br isotope and half ^{81}Br isotope.

(4)



(d) Calculate the relative atomic mass of bromine for a sample which was found to contain 47.0% ^{79}Br and 53.0% ^{81}Br .

Give your answer to **three** significant figures.

(2)

(e) What would be the effect, if any, on the m/e value of the peak if the ion detected had lost two electrons rather than one electron?

(1)

.....

.....



*f) One of the uses of mass spectrometers is for the detection of banned substances, such as anabolic steroids, in a blood or urine sample taken from competitors in sports events.

(i) Suggest **two** precautions that are necessary to ensure that the result of any analysis would be valid.

(2)

.....

.....

.....

.....

(ii) These substances can give competitors an unfair advantage. Suggest why the use of these substances may be of concern to the user.

(1)

.....

.....

.....

.....

(g) Suggest **one** other use for mass spectrometers.

(1)

.....

.....

(Total for Question 17 = 16 marks)



18 Alkenes and cycloalkanes have the same general formula, but react very differently with halogens.

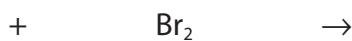
(a) Give the general formula that applies to both alkenes and cycloalkanes.

(1)

(b) Using structural formulae, complete the overall equation for the reaction of an alkene of your own choice, containing fewer than four carbon atoms, with liquid bromine.

Name the product.

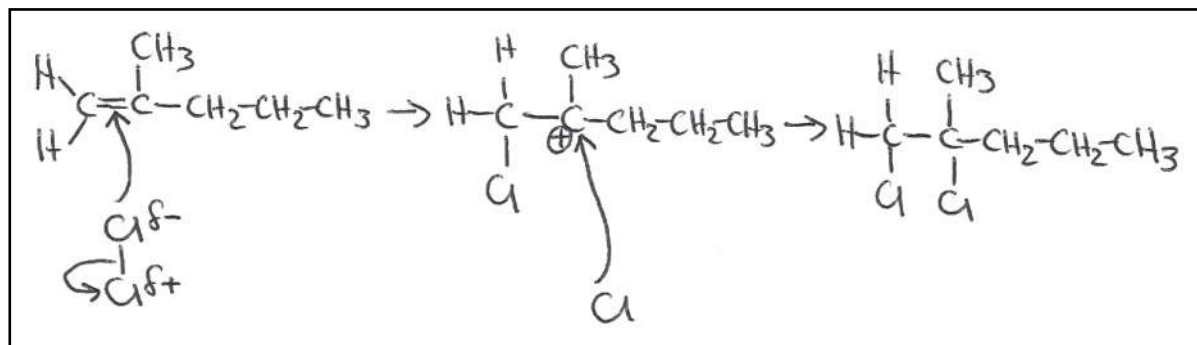
(3)



Name:



*(c) An example of an alkene with six carbon atoms is 2-methylpent-1-ene. It reacts with chlorine by means of an electrophilic addition reaction. The diagram below shows a student's attempt at drawing the mechanism for this reaction.



(i) Identify the three errors in this student's drawing of the mechanism.

(3)

Error 1.....

.....

Error 2.....

.....

Error 3.....

.....

(ii) The structure of the carbocation intermediate is correctly drawn. Explain why the positive charge is on the carbon atom shown.

(1)

.....

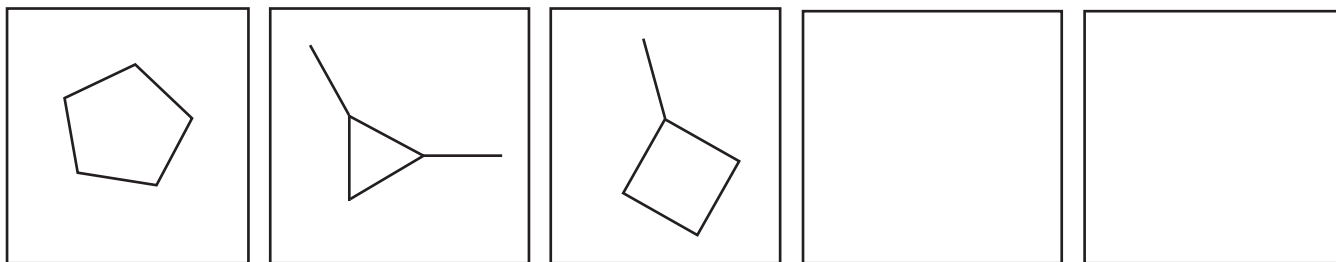
.....

.....



(d) There are five possible cycloalkanes, each containing five carbon atoms. Three of the isomers are given below. Complete the other two boxes, by adding the skeletal formulae of the other two structural isomers.

(2)



(e) Define the term **structural isomerism**.

(1)

.....

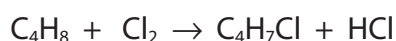
.....

.....

.....

(f) Another example of a cycloalkane is cyclobutane. This compound, like other cycloalkanes, can also react with chlorine.

The overall reaction of cyclobutane with chlorine is as follows:



(i) This reaction can occur at room temperature and pressure.
What further condition is needed for this reaction to take place?

(1)

(ii) Using the appropriate arrows, complete the equation for the initiation step of the reaction mechanism for the reaction of chlorine with cyclobutane.

(2)



(iii) Using molecular formulae, write equations for the **two** propagation steps of this mechanism.

(2)

First propagation step:

Second propagation step:

(iv) Name the type of bond fission which occurs in these propagation steps.

(1)

(v) There are also termination steps in this mechanism. Explain how these differ from the other steps in the mechanism and why these result in the reaction ending.

(2)

(g) If the reaction with cyclobutane is carried out with an excess of chlorine, how are the products of the reaction affected?

(1)

(Total for Question 18 = 20 marks)



19 Sodium and chlorine react together to produce sodium chloride. The bonding in the product is different from that in both of the reactants. Evidence for the type of bonding present can be obtained in a number of different ways.

(a) Draw the electron density map for a chlorine molecule to show covalent bonding.

(1)

(b) Sodium chloride is ionically bonded. What is meant by the term **ionic bond**?

(1)

.....

.....

.....

(c) Electrolysis is an experiment which you could carry out in a school or college laboratory on an aqueous solution of sodium chloride, to provide evidence for the presence of ionic bonding.

Draw a labelled diagram of the apparatus that you would use for this experiment, indicating how your results would show that the bonding was ionic.

(3)



(d) Chlorine gains an electron when it reacts with sodium to form sodium chloride.

(i) Draw the dot and cross diagram of a chloride ion showing outer electrons only.

(1)

(ii) Give the formula of an ion from **Period 3** that is isoelectronic with the chloride ion.

(1)

(e) Sodium and sodium chloride can both be good conductors of electricity.

Under what conditions do these substances conduct electricity?

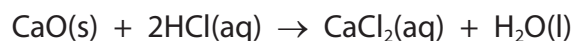
Compare the method of conductivity in each case.

(3)

(Total for Question 19 = 10 marks)



20 The reaction of calcium oxide with hydrochloric acid is an exothermic reaction.



In an experiment to investigate this reaction, the following procedure was carried out.

1. 50.0 cm³ of hydrochloric acid, concentration 2.0 mol dm⁻³ (an excess), was pipetted into a polystyrene cup and the initial temperature measured using a thermometer with 0.5 °C graduations.
2. 1.46 g of calcium oxide powder was weighed out and added to the acid. The mixture was stirred and the maximum temperature measured.

Maximum temperature / °C	35.0
Initial temperature / °C	19.5

- (a) Calculate the enthalpy change, in joules, for the quantities in this experiment. Assume that the specific heat capacity of the solution is 4.18 J g⁻¹ C⁻¹.

Use the expression:

$$\text{energy transferred in joules} = 50.0 \times \text{specific heat capacity} \times \text{temperature change} \quad (1)$$

- (b) Using your answer from (a), calculate the molar enthalpy change for the reaction between calcium oxide and hydrochloric acid. Include a sign and units in your answer.

(2)



(c) The standard molar enthalpy change for the reaction between calcium oxide and hydrochloric acid is $-196.8 \text{ kJ mol}^{-1}$.

(i) Suggest **three** reasons why the calculated value in part (b) is different from this value.

(3)

Reason 1.....

.....

Reason 2.....

.....

Reason 3.....

.....

(ii) Using the standard enthalpy change of $-196.8 \text{ kJ mol}^{-1}$, calculate the minimum mass of calcium oxide that would be needed to raise the temperature of 250 cm^3 of hydrochloric acid (an excess) by 25.0°C .

(3)



(d) The reaction of calcium carbonate with hydrochloric acid has the following standard molar enthalpy change.

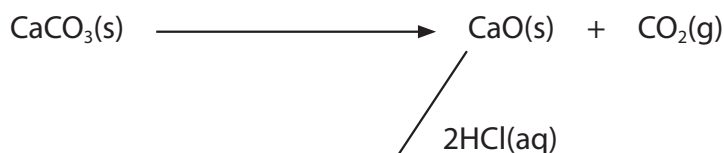
$$\Delta H^{\ominus} = -18.8 \text{ kJ mol}^{-1}$$

This value can be used, with the enthalpy change for the reaction of calcium oxide with hydrochloric acid, to determine the enthalpy change for the thermal decomposition of calcium carbonate. This cannot be measured directly.

(i) Complete the Hess energy cycle below by adding the missing arrow and entities.

Use the cycle, and the standard enthalpy change for the reaction of calcium oxide and hydrochloric acid ($-196.8 \text{ kJ mol}^{-1}$), to determine the standard enthalpy change for the decomposition of calcium carbonate.

(4)



..... () + () + ()

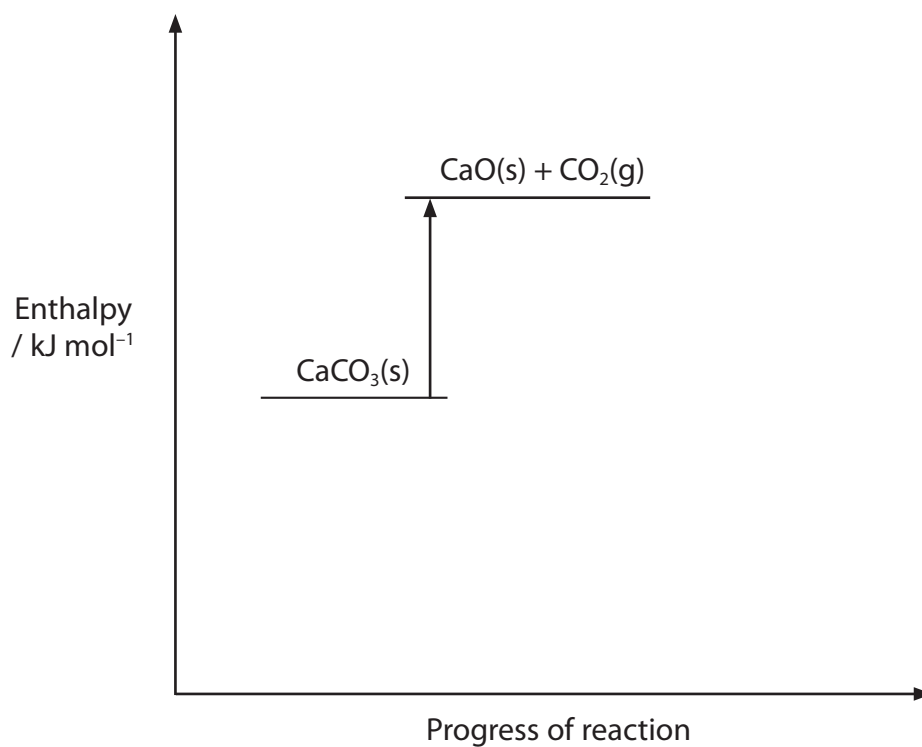
Enthalpy change = kJ mol^{-1}



(ii) Complete and label the enthalpy level diagram below, for the series of reactions in (d)(i).

Your diagram does not have to be to scale.

(1)



(Total for Question 20 = 14 marks)

TOTAL FOR SECTION B = 60 MARKS

TOTAL FOR PAPER = 80 MARKS



The Periodic Table of Elements

	1	2	Key										3	4	5	6	7	0 (8)																																																																																																																																																																																																																																																																																																																																																																																																																																																																																																																																																																																																																																																																																																																																																																																																																																																																																																																																																																																																															
	(1)	(2)	(3)	(4)	(5)	(6)	(7)	(8)	(9)	(10)	(11)	(12)	(13)	(14)	(15)	(16)	(17)	(18)																																																																																																																																																																																																																																																																																																																																																																																																																																																																																																																																																																																																																																																																																																																																																																																																																																																																																																																																																																																																															
			relative atomic mass																																																																																																																																																																																																																																																																																																																																																																																																																																																																																																																																																																																																																																																																																																																																																																																																																																																																																																																																																																																																																														
			atomic symbol																																																																																																																																																																																																																																																																																																																																																																																																																																																																																																																																																																																																																																																																																																																																																																																																																																																																																																																																																																																																																														
			name																																																																																																																																																																																																																																																																																																																																																																																																																																																																																																																																																																																																																																																																																																																																																																																																																																																																																																																																																																																																																														
			atomic (proton) number																																																																																																																																																																																																																																																																																																																																																																																																																																																																																																																																																																																																																																																																																																																																																																																																																																																																																																																																																																																																																														
6.9	Li lithium 3	9.0	Be beryllium 4	11	12	13	14	15	16	17	18	19	20	21	22	23	24	25	26	27	28	29	30	31	32	33	34	35	36	37	38	39	40	41	42	43	44	45	46	47	48	49	50	51	52	53	54	55	56	57	58	59	60	61	62	63	64	65	66	67	68	69	70	71	72	73	74	75	76	77	78	79	80	81	82	83	84	85	86	87	88	89	90	91	92	93	94	95	96	97	98	99	100	101	102	103	104	105	106	107	108	109	110	111	112	113	114	115	116	117	118	119	120	121	122	123	124	125	126	127	128	129	130	131	132	133	134	135	136	137	138	139	140	141	142	143	144	145	146	147	148	149	150	151	152	153	154	155	156	157	158	159	160	161	162	163	164	165	166	167	168	169	170	171	172	173	174	175	176	177	178	179	180	181	182	183	184	185	186	187	188	189	190	191	192	193	194	195	196	197	198	199	200	201	202	203	204	205	206	207	208	209	210	211	212	213	214	215	216	217	218	219	220	221	222	223	224	225	226	227	228	229	230	231	232	233	234	235	236	237	238	239	240	241	242	243	244	245	246	247	248	249	250	251	252	253	254	255	256	257	258	259	260	261	262	263	264	265	266	267	268	269	270	271	272	273	274	275	276	277	278	279	280	281	282	283	284	285	286	287	288	289	290	291	292	293	294	295	296	297	298	299	300	301	302	303	304	305	306	307	308	309	310	311	312	313	314	315	316	317	318	319	320	321	322	323	324	325	326	327	328	329	330	331	332	333	334	335	336	337	338	339	340	341	342	343	344	345	346	347	348	349	350	351	352	353	354	355	356	357	358	359	360	361	362	363	364	365	366	367	368	369	370	371	372	373	374	375	376	377	378	379	380	381	382	383	384	385	386	387	388	389	390	391	392	393	394	395	396	397	398	399	400	401	402	403	404	405	406	407	408	409	410	411	412	413	414	415	416	417	418	419	420	421	422	423	424	425	426	427	428	429	430	431	432	433	434	435	436	437	438	439	440	441	442	443	444	445	446	447	448	449	450	451	452	453	454	455	456	457	458	459	460	461	462	463	464	465	466	467	468	469	470	471	472	473	474	475	476	477	478	479	480	481	482	483	484	485	486	487	488	489	490	491	492	493	494	495	496	497	498	499	500	501	502	503	504	505	506	507	508	509	510	511	512	513	514	515	516	517	518	519	520	521	522	523	524	525	526	527	528	529	530	531	532	533	534	535	536	537	538	539	540	541	542	543	544	545	546	547	548	549	550	551	552	553	554	555	556	557	558	559	560	561	562	563	564	565	566	567	568	569	570	571	572	573	574	575	576	577	578	579	580	581	582	583	584	585	586	587	588	589	590	591	592	593	594	595	596	597	598	599	600	601	602	603	604	605	606	607	608	609	610	611	612	613	614	615	616	617	618	619	620	621	622	623	624	625	626	627	628	629	630	631	632	633	634	635	636	637	638	639	640	641	642	643	644	645	646	647	648	649	650	651	652	653	654	655	656	657	658	659	660	661	662	663	664	665	666	667	668	669	670	671	672	673	674	675	676	677	678	679	680	681	682	683	684	685	686	687	688	689	690	691	692	693	694	695	696	697	698	699	700	701	702	703	704	705	706	707	708	709	710	711	712	713	714	715	716	717	718	719	720	721	722	723	724	725	726	727	728	729	730	731	732	733	734	735	736	737	738	739	740	741	742	743	744	745	746	747	748	749	750	751	752	753	754	755	756	757	758	759	760	761	762	763	764	765	766	767	768	769	770	771	772	773	774	775	776	777	778	779	780	781	782	783	784	785	786	787	788	789	790	791	792	793	794	795	796	797	798	799	800	801	802	803	804	805	806	807	808	809	810	811	812	813	814	815	816	817	818	819	820	821	822	823	824	825	826	827	828	829	830	831	832	833	834	835	836	837	838	839	840	841	842	843	844	845	846	847	848	849	850	851	852	853	854	855	856	857	858	859	860	861	862	863	864	865	866	867	868	869	870	871	872	873	874	875	876	877	878	879	880	881	882	883	884	885	886	887	888	889	890	891	892	893	894	895	896	897	898	899	900	901	902	903	904	905	906	907	908	909	910	911	912	913	914	915	916	917	918	919	920	921	922	923	924	925	926	927	928	929	930	931	932	933	934	935	936	937	938	939	940	941	942	943	944	945	946	947	948	949	950	951	952	953	954	955	956	957	958	959	960	961	962	963	964	965	966	967	968	969	970	971	972	973	974	975	976	977	978	979	980	981	982	983	984	985	986	987	988	989	990	991	992	993	994	995	996	997	998	999	1000

Elements with atomic numbers 112-116 have been reported but not fully authenticated

* Lanthanide series

* Actinide series

